



Illuminating Global Education Through Indianic Values

# NEW STANDARD GROUP OF INSTITUTES



**HOME  
ASSIGNMENT**

**2026**

Name.....

Class.....<sup>2<sup>ND</sup></sup>.....Sec. ....

Branch.....

## हिन्दी

1. 'रश्मि हिन्दी सुलेख माला पुस्तक' में पृष्ठ संख्या 19–25 तक पूर्ण कीजिए।
2. दिए गए शब्दों में से मनुष्यों, वस्तुओं, स्थानों तथा पशुओं के नामों को छाँटकर लिखिए।

राम,	लालगंज,	बाघ,	मेज
अस्पताल,	शेर,	सुमन,	पंखा
मनुष्य	वस्तु	पशु	स्थान
_____	_____	_____	_____
_____	_____	_____	_____

3. शब्द श्रंखला बनाइए— प्रत्येक नया शब्द पिछले शब्द के अन्तिम अक्षर से शुरू होना चाहिए —

(क) शेर \_\_\_\_\_

(ख) जहाज \_\_\_\_\_

4. 'मेरा पंसदीदा खेल' विषय पर चार वाक्य लिखिए—

1— \_\_\_\_\_

2— \_\_\_\_\_

3— \_\_\_\_\_

4— \_\_\_\_\_

## ENGLISH

- 1- **Underline the Common Noun and circle the Proper Noun:**

- (a) Riya lives in Delhi.
- (b) The dog is barking.
- (c) Amit goes to school.
- (d) My mother is cooking food.
- (e) We visited Agra last year.

**2- Change the gender:**

- (a) Horse \_\_\_\_\_ (b) Father \_\_\_\_\_  
(c) Sister \_\_\_\_\_ (d) Aunt \_\_\_\_\_  
(e) Niece \_\_\_\_\_

**3- Write the plural form.**

- (a) Cat \_\_\_\_\_ (b) Dog \_\_\_\_\_  
(c) Mango \_\_\_\_\_ (d) Box \_\_\_\_\_  
(e) Fox \_\_\_\_\_

**4- Choose the correct word:**

- (a) \_\_\_\_\_ is my best friend. (Riya / girl)  
(b) The \_\_\_\_\_ is flying in the sky. (bear / parrot)  
(c) My father works in \_\_\_\_\_. (office / Delhi)  
(d) The \_\_\_\_\_ is a holy river. (Ganga / river)  
(e) I have two \_\_\_\_\_. (pen / pens)

**5- Complete the cursive writing book up to page number 27.**

**MATHS**

**1- What comes before or after?**

- (a) \_\_\_\_\_ 45 (b) 67 \_\_\_\_\_ (c) \_\_\_\_\_ 90  
(d) 58 \_\_\_\_\_

**2- Add the following and match:**

**Column-A**

**Column-B**

(a)  $17 + 5 =$  \_\_\_\_\_

(i) 58

(b)  $18 - 16 =$  \_\_\_\_\_

(ii) 19

(c)  $17 - 8 =$  \_\_\_\_\_

(iii) 11

(d)  $15 + 4 =$  \_\_\_\_\_

(iv) 9

(e)  $20 - 9 =$  \_\_\_\_\_

(v) 22

(f)  $23 + 35 =$  \_\_\_\_\_

(vi) 2

**3- Write:**

(a) Greatest 3 digit even number = \_\_\_\_\_

(b) Smallest 3 digit odd number = \_\_\_\_\_

**4- Ring the smallest number:**

(a) 34, 12, 56, 29

(b) 78, 65, 89, 70

**5- Arrange in ascending order.**

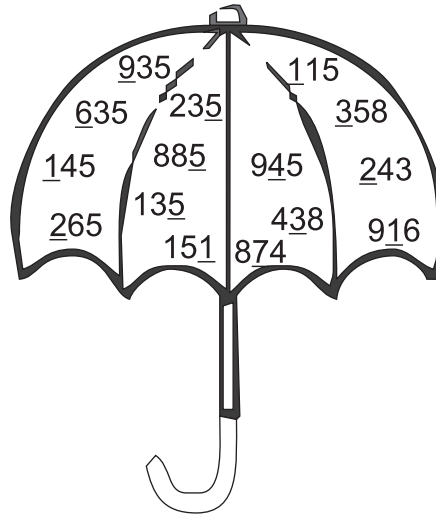
(a) 25, 10, 40, 15

\_\_\_\_\_

(b) 60, 35, 20, 50

\_\_\_\_\_

6- Colour the umbrella using the key below for the underlined number and write place value.



**Ones Place  
Yellow**

---



---



---



---

**Tens Place  
Red**

---



---



---



---

**Hundred Place  
Blue**

---



---



---

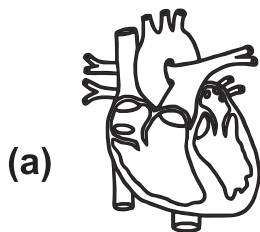


---

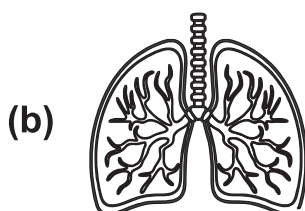
7- To learn table 2—10.

**EVS**

1- Recognise the given body part and write its one function also.




---




---

**2- Members of a family share work and responsibility. This is a way of showing love and care for each other. Tick the things you do for your family members to express your love for them.**

(A) I put my toys, books and other things in place.

(B) I help to keep the house clean.

(C) I obey my elders and do not argue with them.

(D) I am polite, kind, loving and caring with my family members.

(E) I spend time with my family.

**3- Collect pictures from different food groups. Take a paper plate and paste the pictures on it to make a balanced diet plate.**

**4- To learn Lesson-4 (Book work)**

## COMPUTER

**1- Solve these riddles to find the hidden computer parts:**

- I have a long tail but I never eat cheese. I help you click and move with ease. Who am I? \_\_\_\_\_
- I look like a TV but I don't show channels. I show you your drawings and all the icons. Who am I? \_\_\_\_\_.
- I am the brain of the computer, small but very smart. Without me, the computer cannot even start. Who am I? \_\_\_\_\_.
- I have many keys but no locks. I help you type letters and numbers in a box. Who am I? \_\_\_\_\_.

**2- Collect Pictures of 3 input and 3 output devices and paste them.**

<b>Input Device</b>	<b>Output Device</b>
<b>(i)</b>	<b>(i)</b>
<b>(ii)</b>	<b>(ii)</b>
<b>(iii)</b>	<b>(iii)</b>


**3- Find and paste the picture of one machine in your house (like a toaster or washing machine) and describe its IPO cycle in your fair notebook.**

**4- Draw your favorite type of computer in fair notebook and color it. List two places where you have seen these computers being used.**

**5- Revise lesson 1 & Lesson-2. (Book Work + Notebook Work).**

## ART

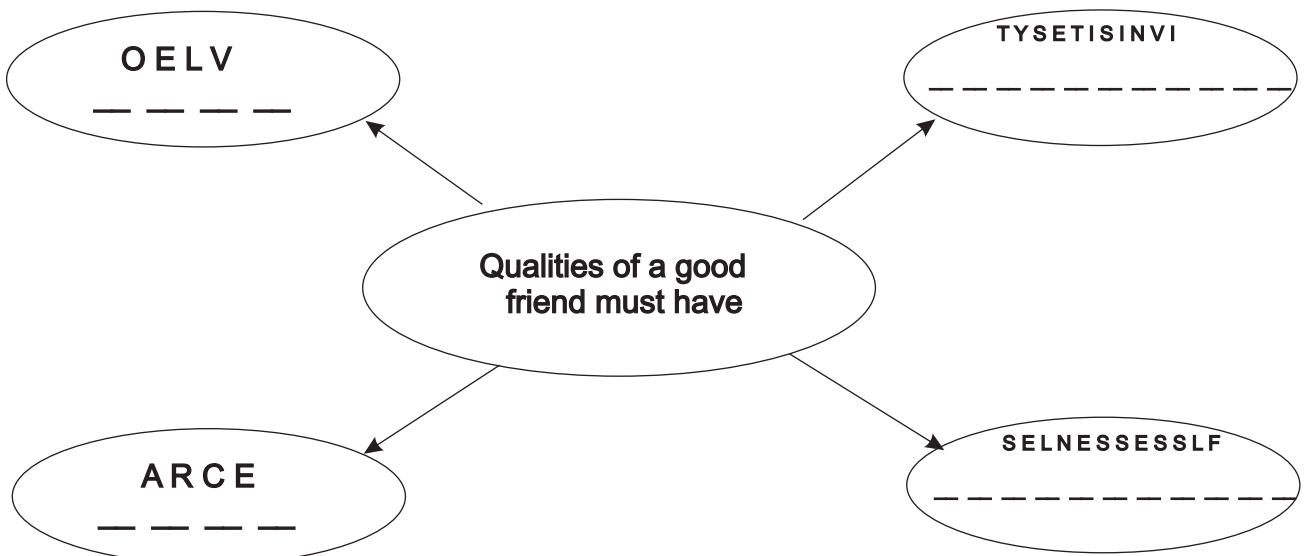
- 1- Join the dots and colour the picture.



- 2- Draw two flowers and paste small pieces of green and orange glaze paper on it in Art fair notebook.

## MORAL TEACHING

- 1- If you want to choose your best friend, what qualities would you look for? Unscramble the following words to find out.



2-



Look at the picture and write 4 lines about it. Colour is also

---

---

---

---

### REASONING

Note- Tick (✓) the correct answer.

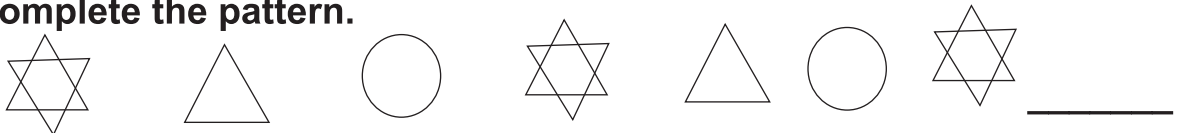
1- If today is Tuesday, what day will come day after tomorrow.

- (a) Monday      (b) Wednesday      (c) Thursday      (d) Friday

2- Which shapes has 4 equal sides?

- (a) Circle      (b) Triangle      (c) Square      (d) Rectangle

3- Complete the pattern.



- (a)       (b)       (c)       (d) 

4- If a clock shows 6 O'clock, where will the hour hand point?

- (a) 3      (b) 6      (c) 9      (d) 12